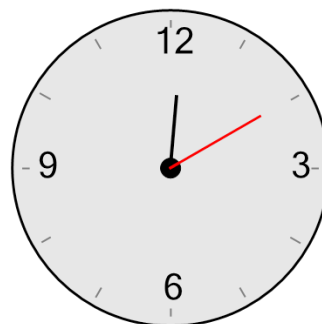




Math worksheet on 'Time - Telling - Minute Hand to Minute - 12 O'Clock (Level 1)'. Part of a broader unit on 'Time - Telling - Intro'

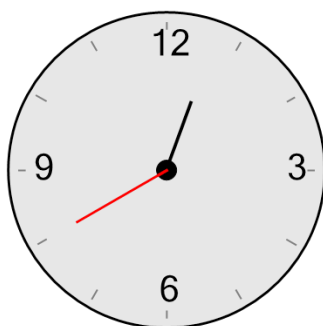
Learn online: app.mobius.academy/math/units/time_telling_intro/

1 What minute is the minute hand (longer hand) pointing to?



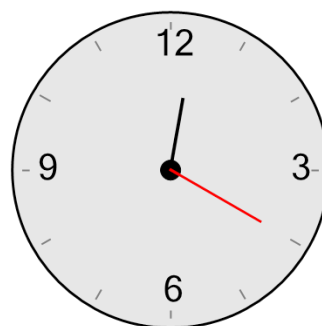
- | | |
|------------------------|------------------------|
| a
55 minutes | b
20 minutes |
| c
5 minutes | d
35 minutes |
| e
30 minutes | f
10 minutes |

2 What minute is the minute hand (longer hand) pointing to?



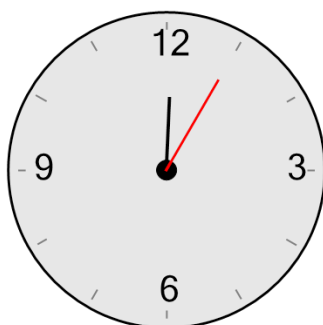
- | | |
|------------------------|------------------------|
| a
55 minutes | b
25 minutes |
| c
40 minutes | d
30 minutes |
| e
0 minutes | f
15 minutes |

3 What minute is the minute hand (longer hand) pointing to?



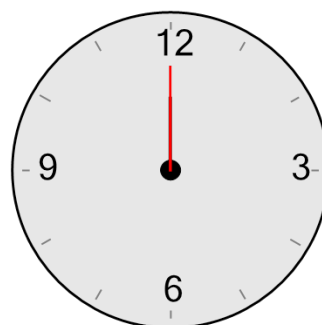
- | | |
|------------------------|------------------------|
| a
45 minutes | b
25 minutes |
| c
0 minutes | d
55 minutes |
| e
20 minutes | f
40 minutes |

4 What minute is the minute hand (longer hand) pointing to?



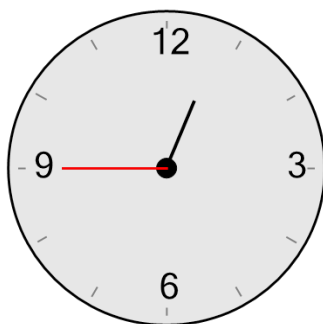
- | | |
|------------------------|------------------------|
| a
5 minutes | b
20 minutes |
| c
35 minutes | d
25 minutes |
| e
45 minutes | f
10 minutes |

5 What minute is the minute hand (longer hand) pointing to?



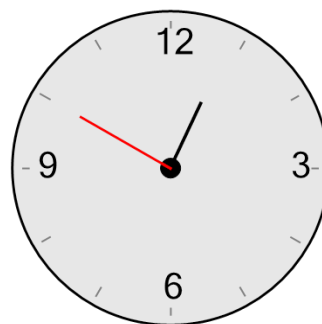
- | | |
|------------------------|------------------------|
| a
50 minutes | b
25 minutes |
| c
20 minutes | d
30 minutes |
| e
0 minutes | f
40 minutes |

6 What minute is the minute hand (longer hand) pointing to?



- | | |
|------------------------|------------------------|
| a
45 minutes | b
55 minutes |
| c
30 minutes | d
50 minutes |
| e
10 minutes | f
5 minutes |

7 What minute is the minute hand (longer hand) pointing to?



- | | |
|------------------------|------------------------|
| a
25 minutes | b
10 minutes |
| c
35 minutes | d
15 minutes |
| e
50 minutes | f
30 minutes |