




Math worksheet on 'Time - Telling - Minute Hand to Minute (Fives Labelled) (Level 1)'. Part of a broader unit on 'Time - Telling - Intro'

Learn online: app.mobius.academy/math/units/time_telling_intro/

1



What minute is the minute hand (longer hand) pointing to?

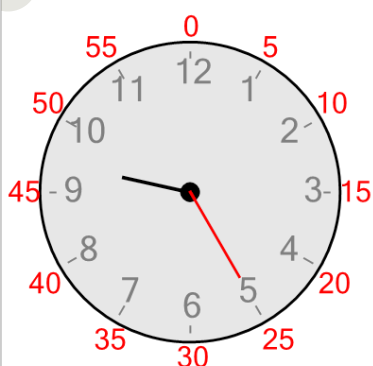
a

30 minutes

b

45 minutes

2



What minute is the minute hand (longer hand) pointing to?


a

25 minutes

b

30 minutes

3



What minute is the minute hand (longer hand) pointing to?

a

5 minutes

b

50 minutes

4



What minute is the minute hand (longer hand) pointing to?


a

40 minutes

b

25 minutes

5



What minute is the minute hand (longer hand) pointing to?

a

30 minutes

b

55 minutes

6



What minute is the minute hand (longer hand) pointing to?


a

40 minutes

b

30 minutes

7



What minute is the minute hand (longer hand) pointing to?

a

50 minutes

b

20 minutes