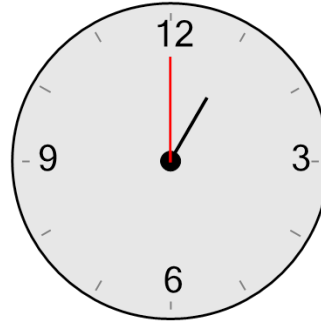




Math worksheet on 'Time - Telling - Minute Hand to Minute (Level 1)'. Part of a broader unit on 'Time - Telling - Intro'

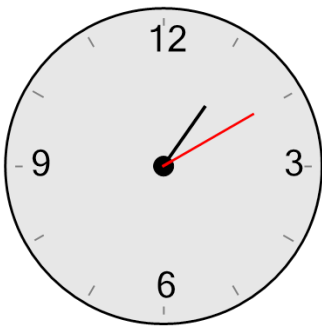
Learn online: app.mobius.academy/math/units/time_telling_intro/

1 What minute is the minute hand (longer hand) pointing to?



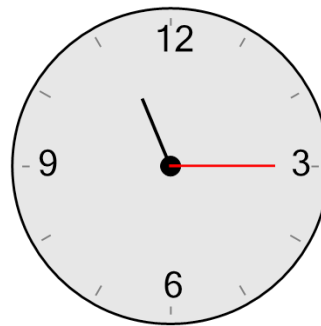
- | | |
|------------------------|------------------------|
| a
10 minutes | b
0 minutes |
| c
40 minutes | d
45 minutes |
| e
15 minutes | f
5 minutes |

2 What minute is the minute hand (longer hand) pointing to?



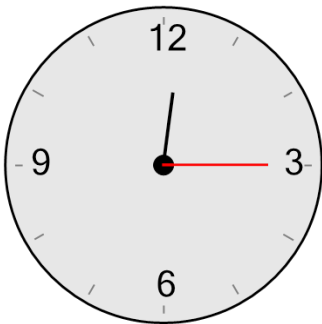
- | | |
|------------------------|------------------------|
| a
25 minutes | b
10 minutes |
| c
55 minutes | d
30 minutes |
| e
35 minutes | f
0 minutes |

3 What minute is the minute hand (longer hand) pointing to?



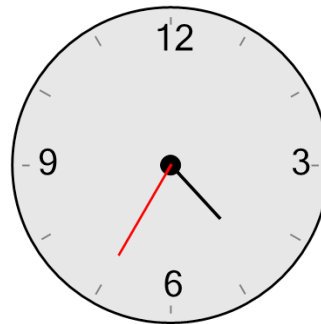
- | | |
|------------------------|------------------------|
| a
55 minutes | b
0 minutes |
| c
50 minutes | d
35 minutes |
| e
15 minutes | f
40 minutes |

4 What minute is the minute hand (longer hand) pointing to?



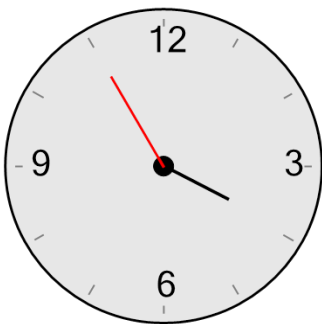
- | | |
|------------------------|------------------------|
| a
15 minutes | b
45 minutes |
| c
0 minutes | d
5 minutes |
| e
55 minutes | f
25 minutes |

5 What minute is the minute hand (longer hand) pointing to?



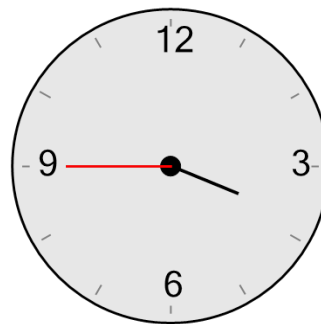
- | | |
|------------------------|------------------------|
| a
5 minutes | b
10 minutes |
| c
25 minutes | d
40 minutes |
| e
35 minutes | f
50 minutes |

6 What minute is the minute hand (longer hand) pointing to?



- | | |
|------------------------|------------------------|
| a
55 minutes | b
45 minutes |
| c
15 minutes | d
30 minutes |
| e
20 minutes | f
10 minutes |

7 What minute is the minute hand (longer hand) pointing to?



- | | |
|------------------------|------------------------|
| a
10 minutes | b
5 minutes |
| c
30 minutes | d
45 minutes |
| e
25 minutes | f
50 minutes |