



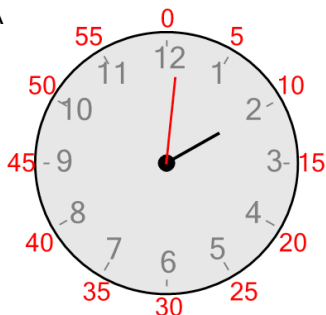
Time - Telling - Minute to Minute Hand (One Minutes) (Fives Labelled)

1

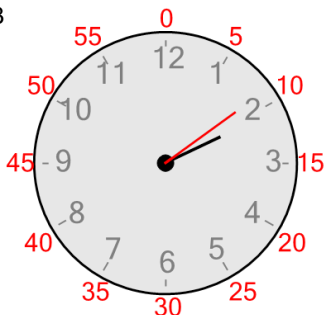
Which clock shows this number of minutes?

9 minutes

A



B




2

Which clock shows this number of minutes?

56 minutes

A



B

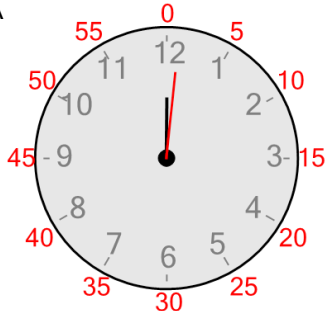


3

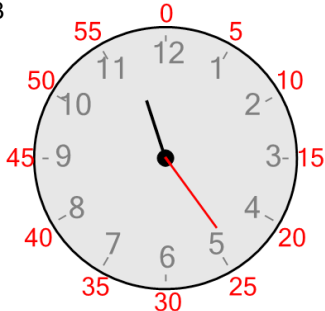
Which clock shows this number of minutes?

24 minutes

A



B

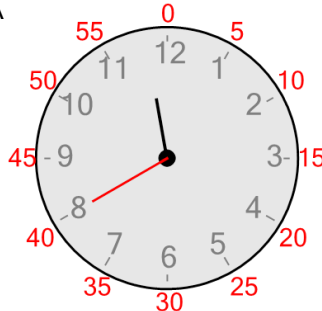


4

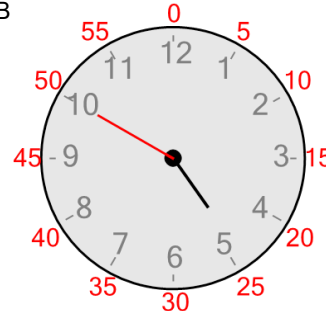
Which clock shows this number of minutes?

40 minutes

A



B

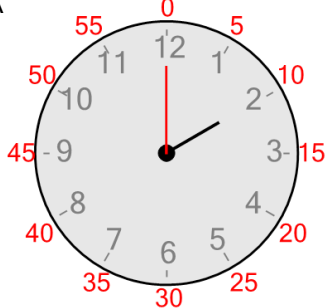


5

Which clock shows this number of minutes?

48 minutes

A



B

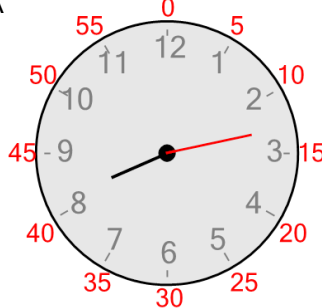


6

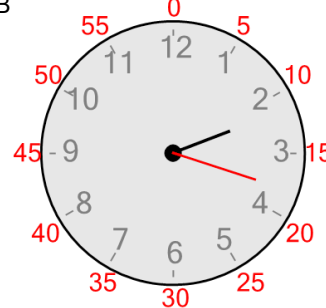
Which clock shows this number of minutes?

18 minutes

A



B

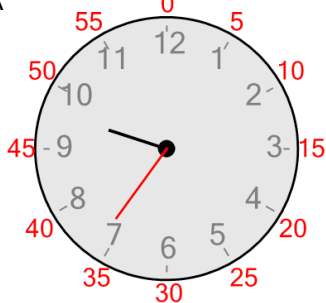


7

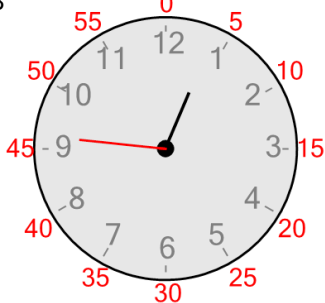
Which clock shows this number of minutes?

36 minutes

A



B



8

Which clock shows this number of minutes?

49 minutes

A



B

