

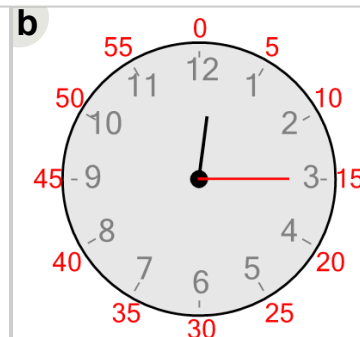
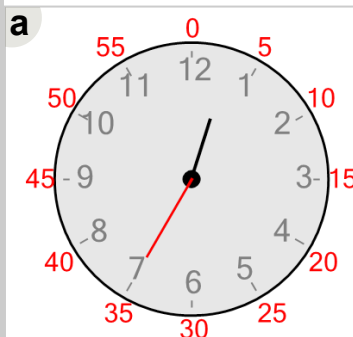


Math worksheet on 'Time - Telling - Minute to Minute Hand (Quarter Hours) (Fives Labelled) (Level 1)'.  
Part of a broader unit on 'Time - Telling - Intro'

Learn online: [app.mobius.academy/math/units/time\\_telling\\_intro/](http://app.mobius.academy/math/units/time_telling_intro/)

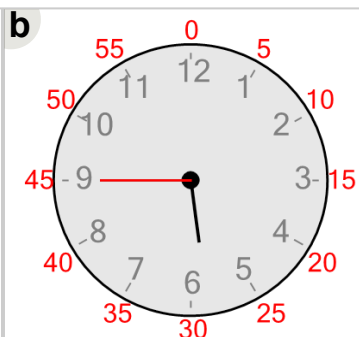
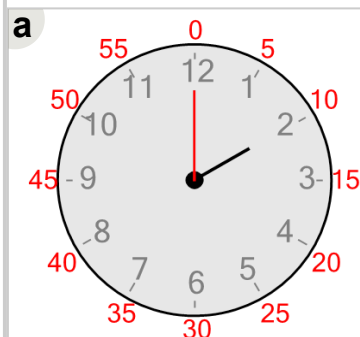
**1** Which clock shows this number of minutes?

15 minutes



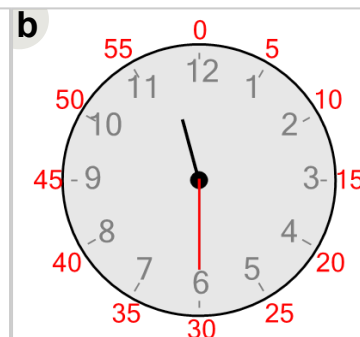
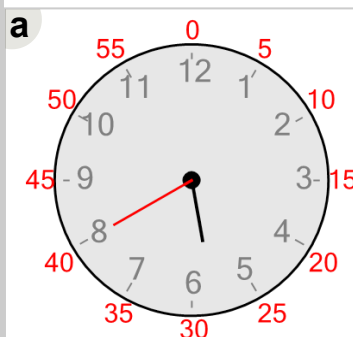
**2** Which clock shows this number of minutes?

45 minutes



**3** Which clock shows this number of minutes?

30 minutes



**4** Which clock shows this number of minutes?

0 minutes

