




Math worksheet on 'Time - Telling - Clock to Digital - Five Minutes (Level 1)'. Part of a broader unit on 'Time - Telling - Intro'

Learn online: [app.mobius.academy/math/units/time\\_telling\\_intro/](http://app.mobius.academy/math/units/time_telling_intro/)

1



What time is shown on this clock?


**a**

8:50

**b**

8:35

2



What time is shown on this clock?


**a**

6:25

**b**

2:20

3



What time is shown on this clock?


**a**

3:45

**b**

5:50

4



What time is shown on this clock?


**a**

6:05

**b**

11:20

5



What time is shown on this clock?

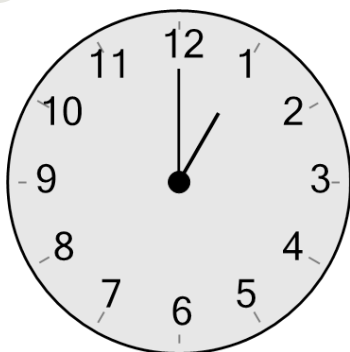
**a**

7:40

**b**

10:40

6



What time is shown on this clock?


**a**

4:20

**b**

1:00

7



What time is shown on this clock?

**a**

1:05

**b**

1:20