




Math worksheet on 'Time - Telling - Clock to Digital - Full Hours (Level 1)'. Part of a broader unit on 'Time - Telling - Intro'

Learn online: [app.mobius.academy/math/units/time\\_telling\\_intro/](http://app.mobius.academy/math/units/time_telling_intro/)

1



What time is shown on this clock?

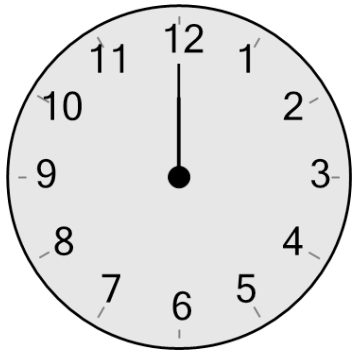
**a**

4:20

**b**

7:00

2



What time is shown on this clock?


**a**

7:15

**b**

12:00

3



What time is shown on this clock?


**a**

1:15

**b**

2:00

4



What time is shown on this clock?


**a**

1:00

**b**

2:05

5



What time is shown on this clock?


**a**

4:00

**b**

2:20

6



What time is shown on this clock?


**a**

9:00

**b**

12:00

7



What time is shown on this clock?

**a**

8:00

**b**

10:05