




Math worksheet on 'Time - Telling - Clock to Digital - Half Hours (Level 1)'. Part of a broader unit on 'Time - Telling - Intro'

Learn online: app.mobius.academy/math/units/time_telling_intro/

1



What time is shown on this clock?


a

1:30

b

2:10

2



What time is shown on this clock?

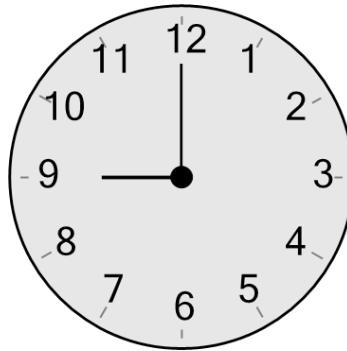
a

12:15

b

10:00

3



What time is shown on this clock?


a

8:10

b

9:00

4



What time is shown on this clock?


a

4:15

b

1:00

5



What time is shown on this clock?

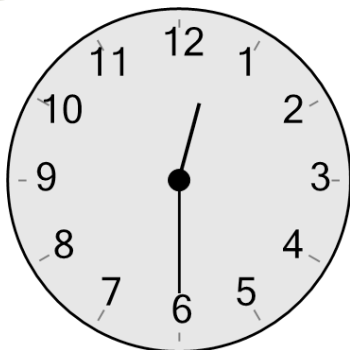
a

4:30

b

2:20

6



What time is shown on this clock?


a

12:40

b

12:30

7



What time is shown on this clock?

a

2:15

b

2:30