




Math worksheet on 'Time - Telling - Clock to Digital - One Minutes (Level 1)'. Part of a broader unit on 'Time - Telling - Practice'

Learn online: app.mobius.academy/math/units/time_telling_practice/

1



What time is shown on this clock?


a

5:27

b

6:22

2



What time is shown on this clock?


a

3:52

b

6:59

3



What time is shown on this clock?


a

10:11

b

12:06

4



What time is shown on this clock?


a

6:34

b

8:09

5



What time is shown on this clock?


a

6:33

b

8:38

6



What time is shown on this clock?


a

9:37

b

9:52

7



What time is shown on this clock?

a

7:11

b

3:01