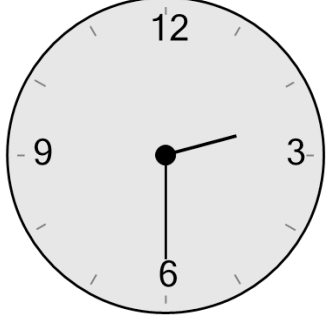




Math worksheet on 'Time - Telling - Clock to Digital - Quarter Hours (Level 1)'. Part of a broader unit on 'Time - Telling - Intro'

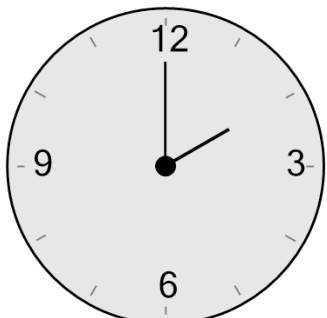
Learn online: [app.mobius.academy/math/units/time\\_telling\\_intro/](http://app.mobius.academy/math/units/time_telling_intro/)

**1** What time is shown on this clock?



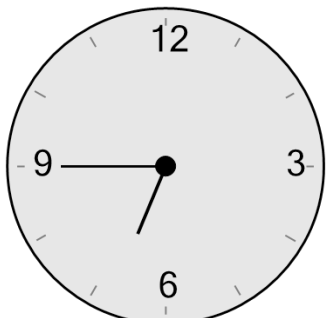
<b>a</b>	<b>b</b>	<b>c</b>
2:20	1:45	3:35
<b>d</b>	<b>e</b>	<b>f</b>
2:30	6:35	4:35

**2** What time is shown on this clock?



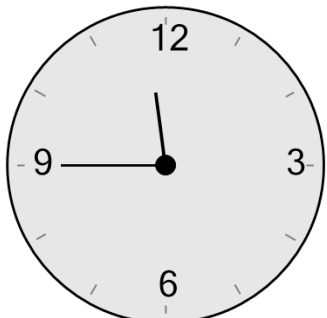
<b>a</b>	<b>b</b>	<b>c</b>
2:10	2:20	1:20
<b>d</b>	<b>e</b>	<b>f</b>
2:00	2:05	2:15

**3** What time is shown on this clock?



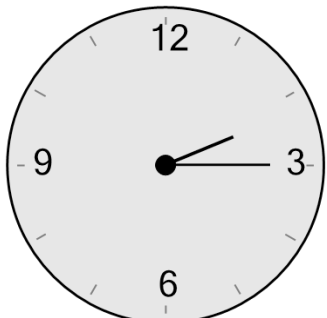
<b>a</b>	<b>b</b>	<b>c</b>
6:45	4:30	10:35
<b>d</b>	<b>e</b>	<b>f</b>
4:45	1:59	8:55

**4** What time is shown on this clock?



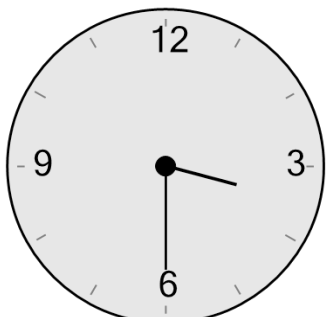
<b>a</b>	<b>b</b>	<b>c</b>
7:40	9:40	7:35
<b>d</b>	<b>e</b>	<b>f</b>
7:59	12:25	11:45

**5** What time is shown on this clock?



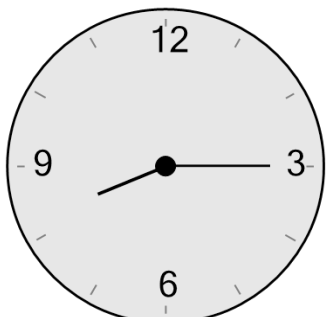
<b>a</b>	<b>b</b>	<b>c</b>
2:15	3:20	5:10
<b>d</b>	<b>e</b>	<b>f</b>
1:05	3:10	5:15

**6** What time is shown on this clock?



<b>a</b>	<b>b</b>	<b>c</b>
2:25	5:45	1:35
<b>d</b>	<b>e</b>	<b>f</b>
2:30	3:30	1:10

**7** What time is shown on this clock?



<b>a</b>	<b>b</b>	<b>c</b>
10:15	3:00	11:10
<b>d</b>	<b>e</b>	<b>f</b>
8:10	8:15	8:05