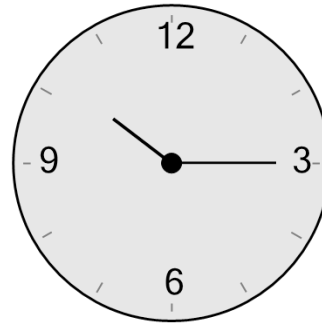




Math worksheet on 'Time - Telling - Clock to Words - Five Minutes (Level 1)'. Part of a broader unit on 'Time - Telling - Intro'

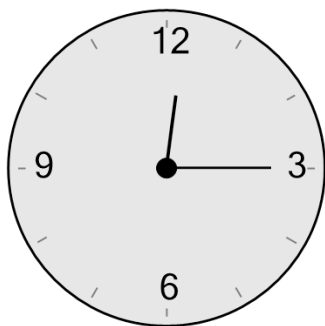
Learn online: [app.mobius.academy/math/units/time\\_telling\\_intro/](http://app.mobius.academy/math/units/time_telling_intro/)

1 What time is shown on this clock?



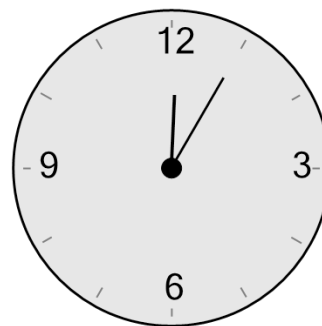
- a twelve twenty
- b eight twenty
- c quarter past nine
- d quarter past ten
- e nine twenty-five
- f twelve oh five

2 What time is shown on this clock?



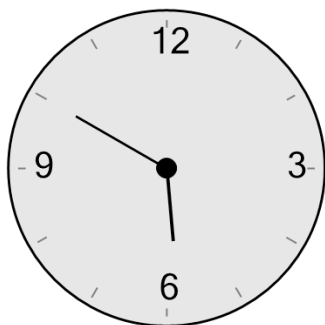
- a quarter past twelve
- b ten twenty-five
- c twelve twenty
- d twelve twenty-five
- e eight oh five
- f eleven twenty

3 What time is shown on this clock?



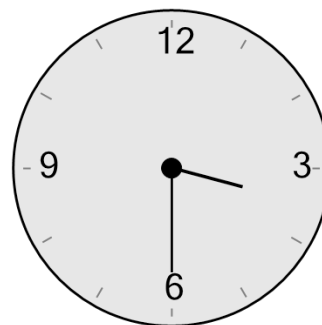
- a eleven twenty-five
- b seven twenty
- c twelve twenty
- d ten oh five
- e twelve oh five
- f ten ten

4 What time is shown on this clock?



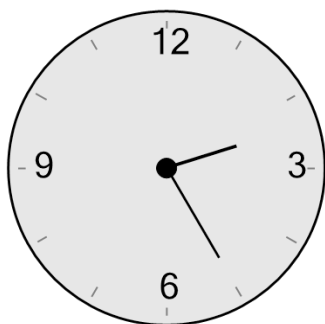
- a one minutes to two
- b ten to six
- c seven twenty-five
- d one minutes to five
- e half past one
- f ten to nine

5 What time is shown on this clock?



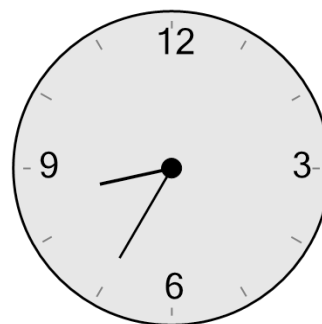
- a five oh five
- b half past three
- c ten to two
- d twenty to two
- e seven twenty-five
- f ten to seven

6 What time is shown on this clock?



- a half past one
- b two twenty-five
- c twenty-five to four
- d six twenty
- e four twenty
- f quarter past three

7 What time is shown on this clock?



- a quarter to one
- b twenty to twelve
- c half past ten
- d ten to eight
- e twenty-five to nine
- f ten to ten