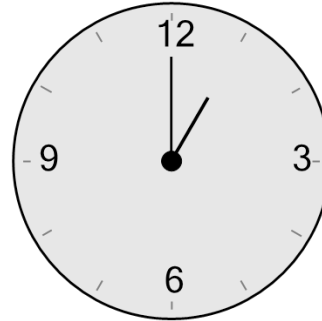




Math worksheet on 'Time - Telling - Clock to Words - Full Hours (Level 1)'. Part of a broader unit on 'Time - Telling - Intro'

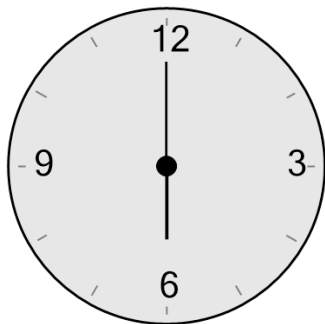
Learn online: [app.mobius.academy/math/units/time\\_telling\\_intro/](http://app.mobius.academy/math/units/time_telling_intro/)

1 What time is shown on this clock?



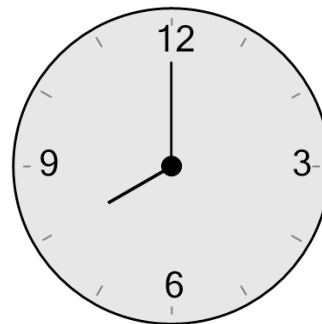
- a four ten
- b quarter past four
- c five oh five
- d one ten
- e one o'clock
- f quarter past three

2 What time is shown on this clock?



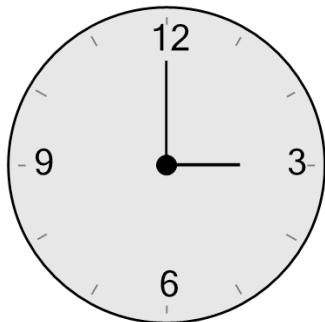
- a nine twenty
- b five o'clock
- c six twenty
- d two ten
- e six o'clock
- f seven twenty-five

3 What time is shown on this clock?



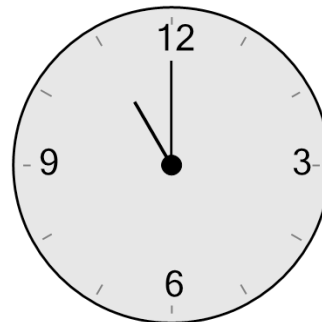
- a nine o'clock
- b eight o'clock
- c ten twenty
- d quarter past nine
- e quarter past ten
- f six ten

4 What time is shown on this clock?



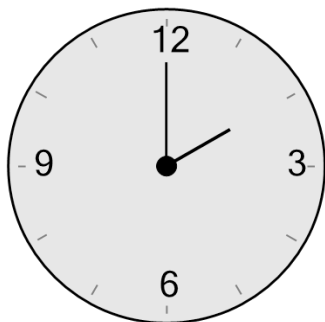
- a two oh five
- b five oh five
- c quarter past three
- d six twenty
- e three o'clock
- f two ten

5 What time is shown on this clock?



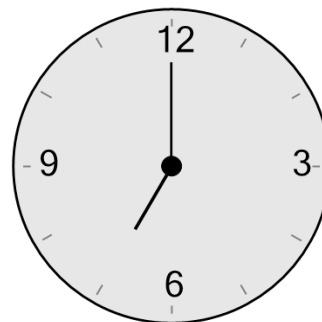
- a nine o'clock
- b quarter past twelve
- c quarter past seven
- d nine oh five
- e twelve twenty
- f eleven o'clock

6 What time is shown on this clock?



- a six oh five
- b two ten
- c quarter past three
- d three oh five
- e one twenty
- f two o'clock

7 What time is shown on this clock?



- a seven o'clock
- b quarter past two
- c six twenty
- d eleven ten
- e nine ten
- f two ten