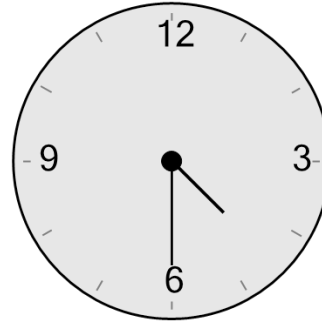




Math worksheet on 'Time - Telling - Clock to Words - Half Hours (Level 1)'. Part of a broader unit on 'Time - Telling - Intro'

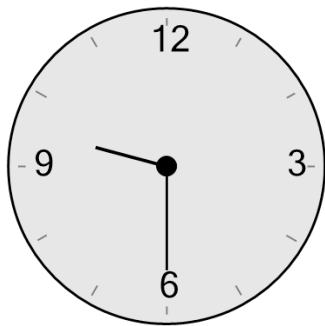
Learn online: [app.mobius.academy/math/units/time\\_telling\\_intro/](http://app.mobius.academy/math/units/time_telling_intro/)

1 What time is shown on this clock?



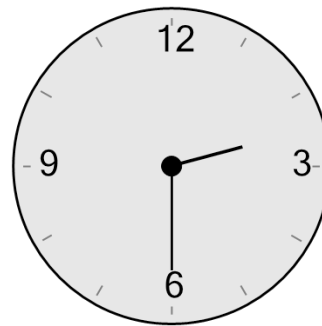
- a half past seven
- b half past four
- c twenty-five to two
- d twenty-five to six
- e quarter to six
- f six twenty

2 What time is shown on this clock?



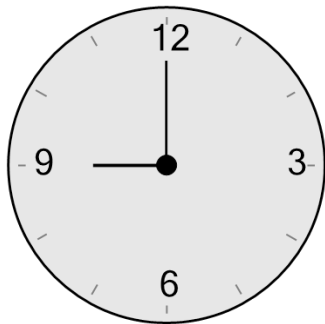
- a quarter to eight
- b quarter past twelve
- c half past nine
- d twenty-five to ten
- e five oh five
- f quarter to ten

3 What time is shown on this clock?



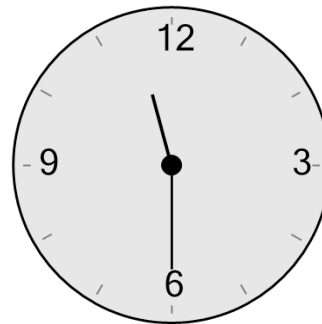
- a half past two
- b one twenty
- c three ten
- d twenty to five
- e quarter to seven
- f ten to two

4 What time is shown on this clock?



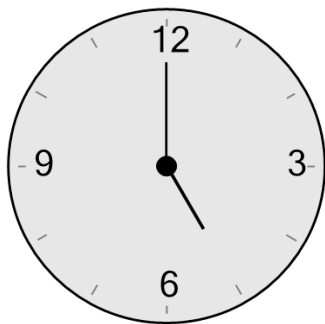
- a nine oh five
- b four ten
- c nine o'clock
- d nine ten
- e twelve ten
- f quarter past five

5 What time is shown on this clock?



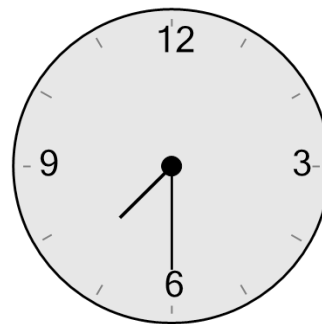
- a half past eleven
- b twelve twenty-five
- c twenty-five to one
- d ten to one
- e quarter past seven
- f quarter to ten

6 What time is shown on this clock?



- a five twenty
- b five o'clock
- c quarter past four
- d quarter past two
- e eight twenty
- f six twenty

7 What time is shown on this clock?



- a quarter to three
- b ten to eight
- c quarter to ten
- d half past five
- e ten twenty-five
- f half past seven