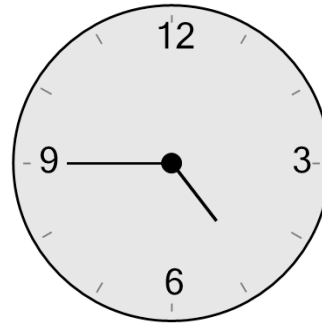




Math worksheet on 'Time - Telling - Clock to Words - Quarter Hours (Level 1)'. Part of a broader unit on 'Time - Telling - Intro'

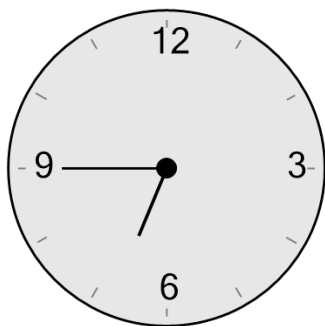
Learn online: app.mobius.academy/math/units/time_telling_intro/

1 What time is shown on this clock?



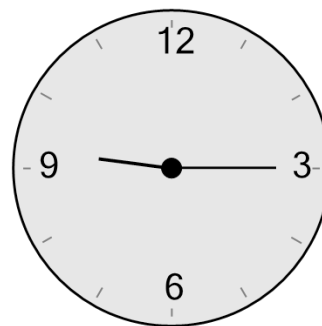
- a one minutes to seven
- b ten to nine
- c quarter to two
- d quarter to five
- e half past six
- f twenty to two

2 What time is shown on this clock?



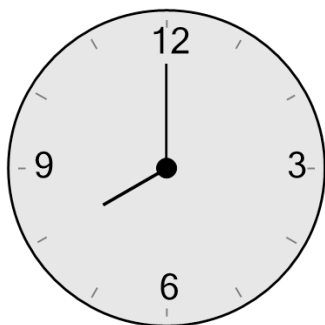
- a half past five
- b twenty-five to nine
- c twenty to four
- d one minutes to two
- e quarter to seven
- f ten to five

3 What time is shown on this clock?



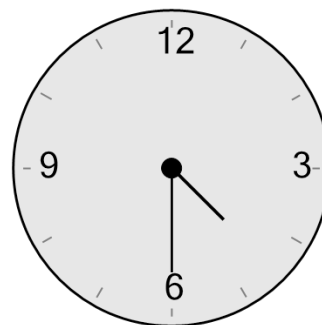
- a seven o'clock
- b quarter past nine
- c ten twenty-five
- d five ten
- e twelve twenty
- f nine oh five

4 What time is shown on this clock?



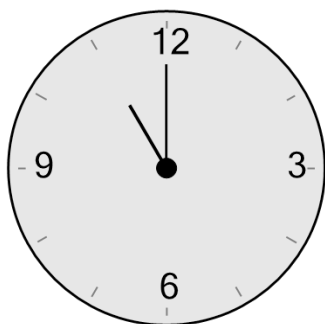
- a quarter past four
- b nine twenty-five
- c quarter past ten
- d eleven ten
- e four oh five
- f eight o'clock

5 What time is shown on this clock?



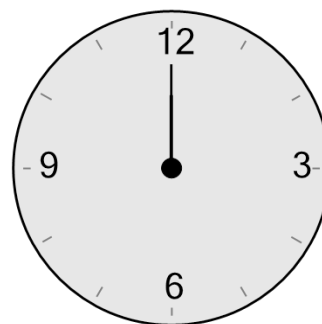
- a one ten
- b one twenty
- c half past four
- d ten to five
- e quarter past one
- f one oh five

6 What time is shown on this clock?



- a eleven o'clock
- b quarter past ten
- c eleven twenty-five
- d quarter past six
- e six twenty
- f eleven oh five

7 What time is shown on this clock?



- a eight ten
- b twelve o'clock
- c twelve twenty
- d twelve twenty-five
- e quarter past twelve
- f quarter past nine