



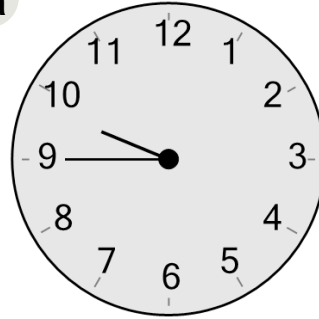
Math worksheet on 'Time - Telling - Digital to Clock - Five Minutes (Level 1)'. Part of a broader unit on 'Time - Telling - Intro'

Learn online: [app.mobius.academy/math/units/time\\_telling\\_intro/](http://app.mobius.academy/math/units/time_telling_intro/)

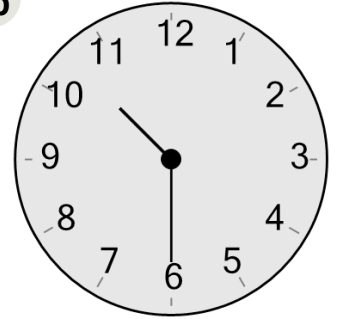
1 Which clock shows the time indicated

10:30

a



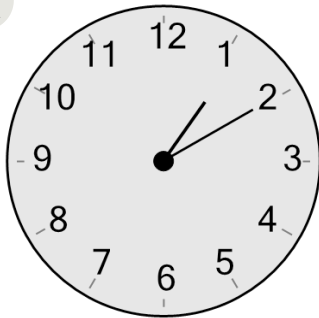
b



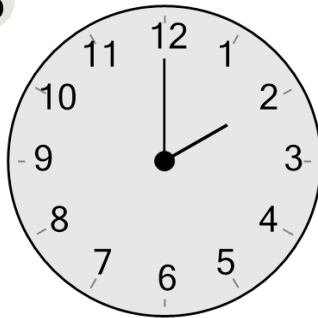
2 Which clock shows the time indicated

1:10

a



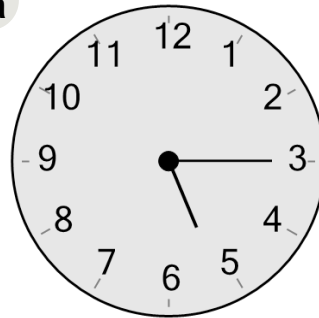
b



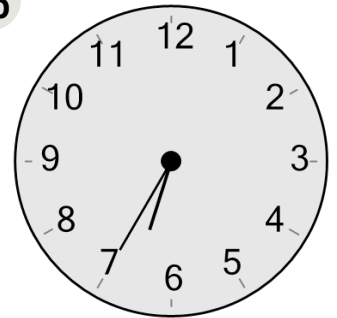
3 Which clock shows the time indicated

5:15

a



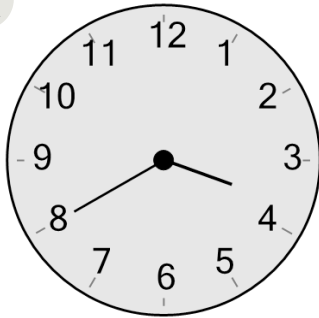
b



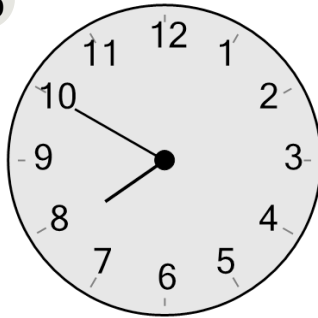
4 Which clock shows the time indicated

7:50

a



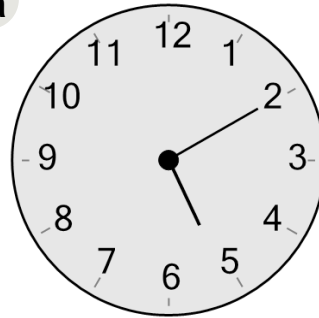
b



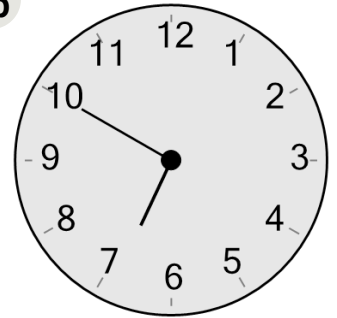
5 Which clock shows the time indicated

6:50

a



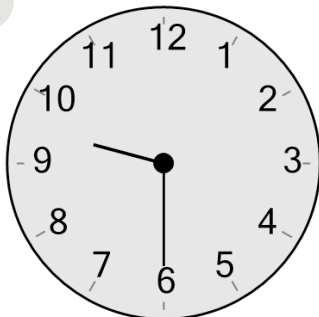
b



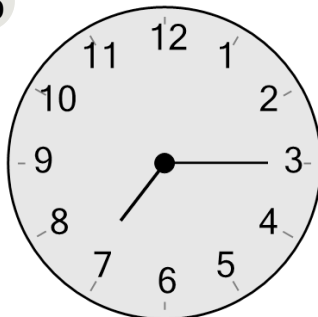
6 Which clock shows the time indicated

9:30

a



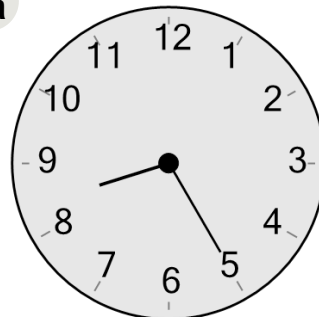
b



7 Which clock shows the time indicated

12:50

a



b

