

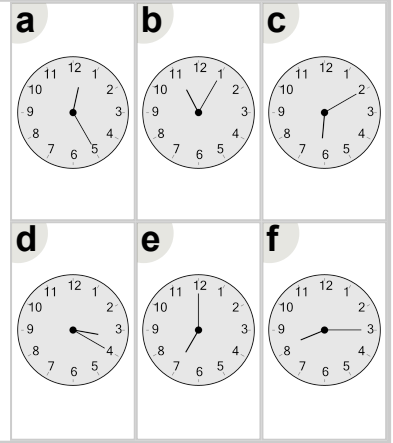


Math worksheet on 'Time - Telling - Digital to Clock - Quarter Hours (Level 2)'. Part of a broader unit on 'Time - Telling - Intro'

Learn online: app.mobius.academy/math/units/time_telling_intro/

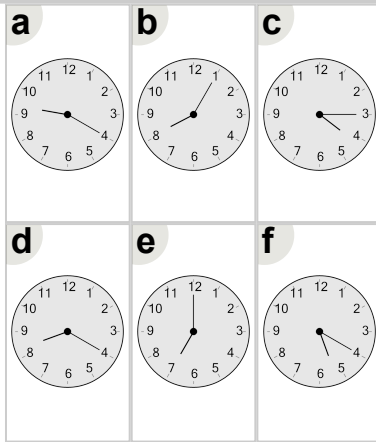
1 Which clock shows the time indicated

8:15



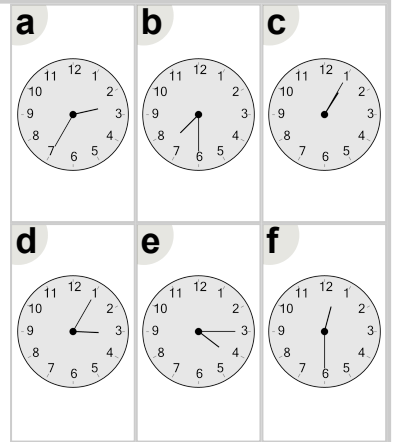
2 Which clock shows the time indicated

7:00



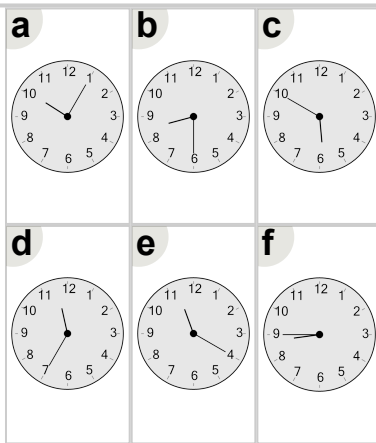
3 Which clock shows the time indicated

4:15



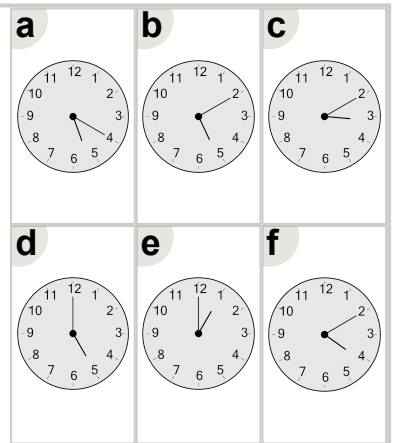
4 Which clock shows the time indicated

8:45



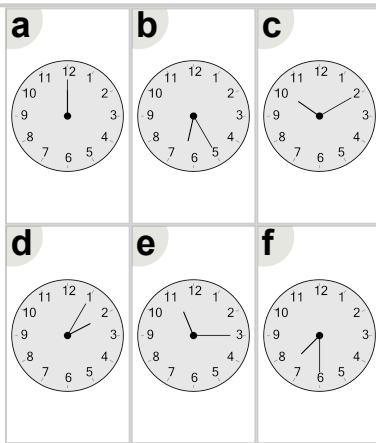
5 Which clock shows the time indicated

1:00



6 Which clock shows the time indicated

11:15



7 Which clock shows the time indicated

10:15

