




Math worksheet on 'Time - Telling - Words (Plain) to Clock - One Minutes (Level 1)'. Part of a broader unit on 'Time - Telling - Practice'

Learn online: app.mobius.academy/math/units/time_telling_practice/

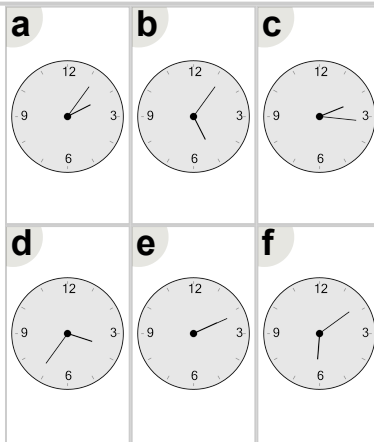
1 Which clock shows the time indicated

nine thirty



2 Which clock shows the time indicated

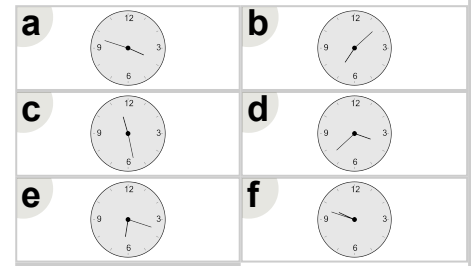
two sixteen



3

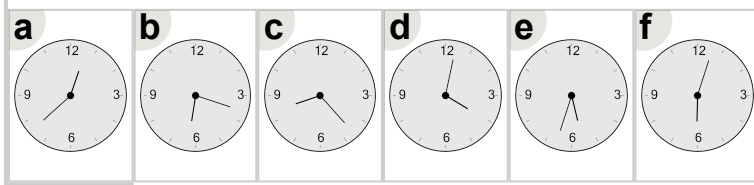
Which clock shows the time indicated

eleven twenty-eight



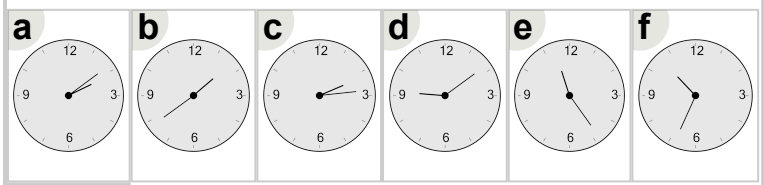
4 Which clock shows the time indicated

eight twenty-three



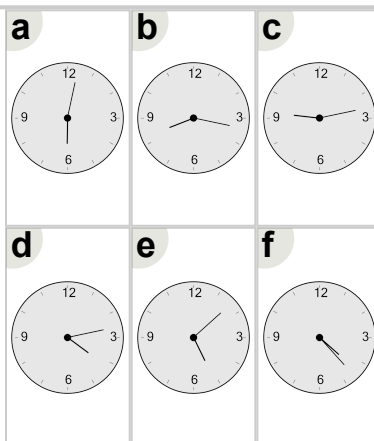
5 Which clock shows the time indicated

ten thirty-four



6 Which clock shows the time indicated

six oh two



7 Which clock shows the time indicated

eight oh six

