

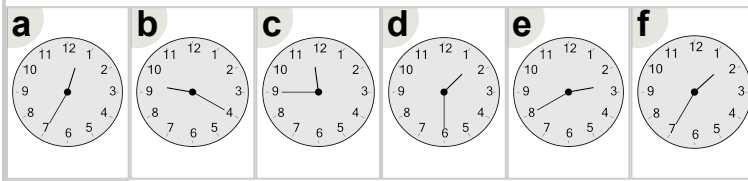


Math worksheet on 'Time - Telling - Words (Plain) to Clock - Quarter Hours (Level 2)'. Part of a broader unit on 'Time - Telling - Intro'

Learn online: [app.mobius.academy/math/units/time\\_telling\\_intro/](http://app.mobius.academy/math/units/time_telling_intro/)

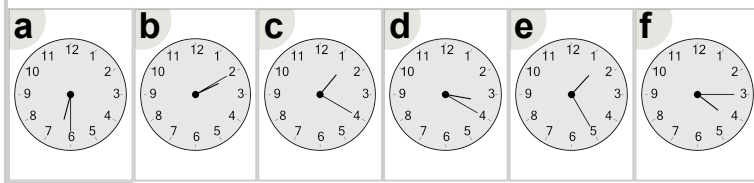
**1** Which clock shows the time indicated

eleven forty-five



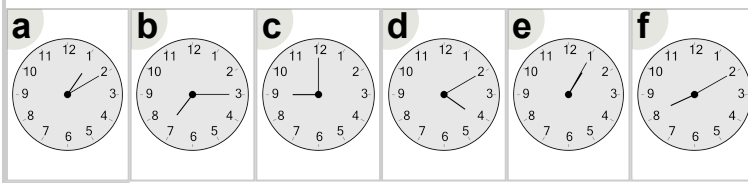
**2** Which clock shows the time indicated

four fifteen



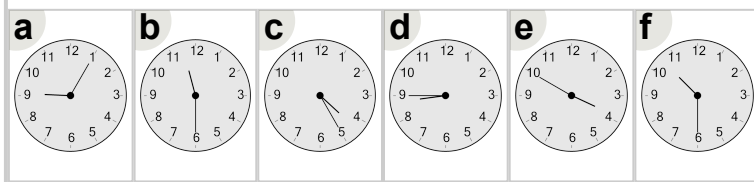
**3** Which clock shows the time indicated

nine o'clock



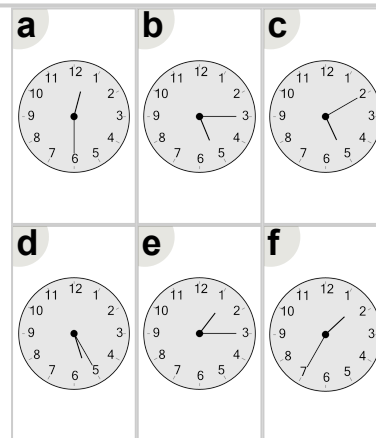
**4** Which clock shows the time indicated

eight forty-five



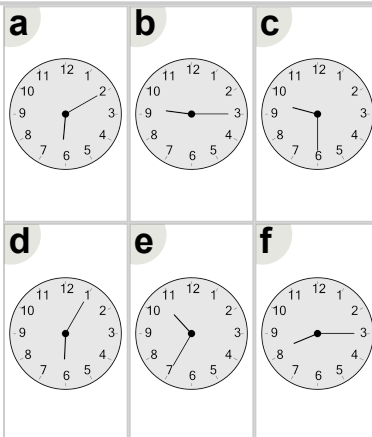
**5** Which clock shows the time indicated

one fifteen



**6** Which clock shows the time indicated

nine thirty



**7** Which clock shows the time indicated

seven thirty

