



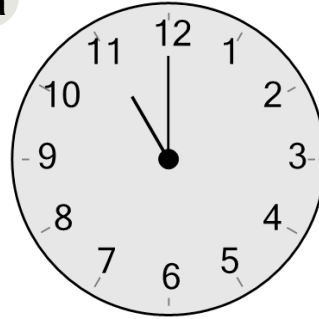
Math worksheet on 'Time - Telling - Words to Clock - Full Hours (Level 1)'. Part of a broader unit on 'Time - Telling - Intro'

Learn online: [app.mobius.academy/math/units/time\\_telling\\_intro/](http://app.mobius.academy/math/units/time_telling_intro/)

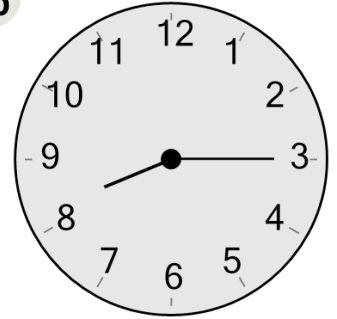
**1** Which clock shows the time indicated

eleven o'clock

**a**



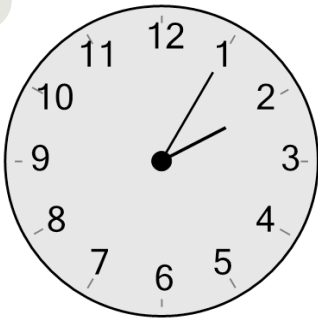
**b**



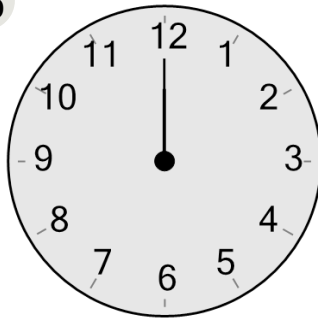
**2** Which clock shows the time indicated

twelve o'clock

**a**



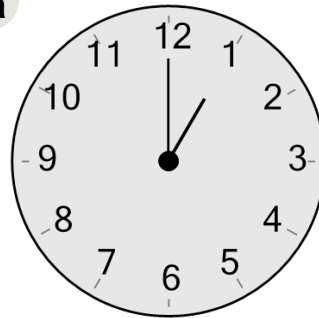
**b**




**3** Which clock shows the time indicated

one o'clock

**a**



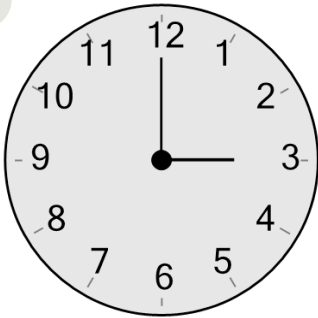
**b**



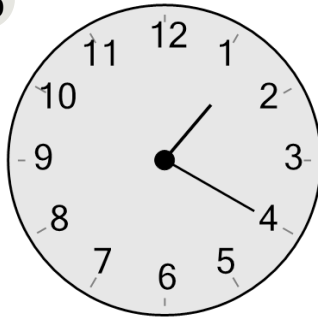
**4** Which clock shows the time indicated

three o'clock

**a**



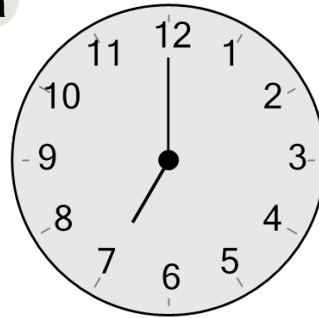
**b**



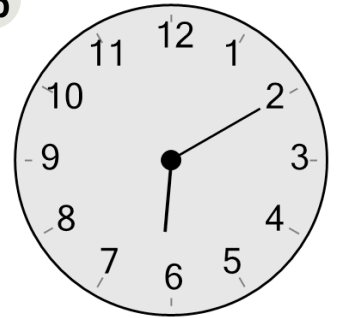
**5** Which clock shows the time indicated

seven o'clock

**a**



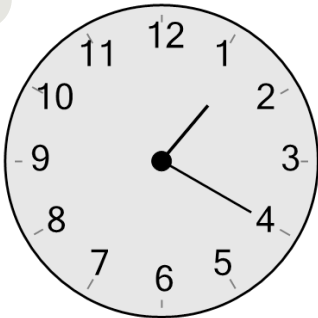
**b**



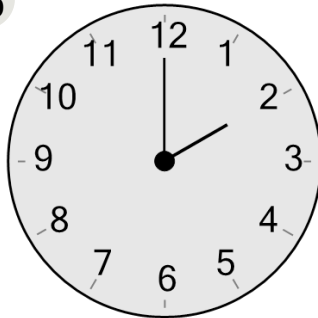
**6** Which clock shows the time indicated

two o'clock

**a**



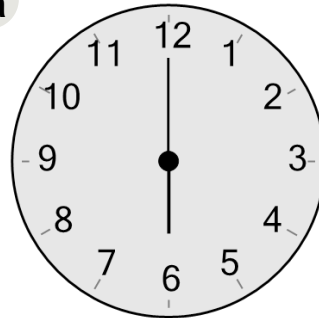
**b**



**7** Which clock shows the time indicated

six o'clock

**a**



**b**

