

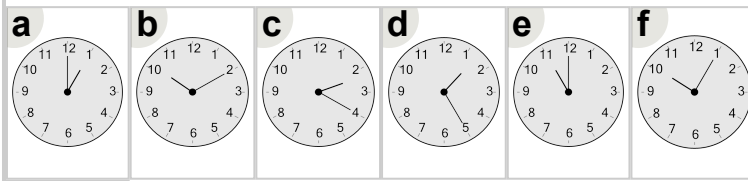


Math worksheet on 'Time - Telling - Words to Clock - Full Hours (Level 2)'. Part of a broader unit on 'Time - Telling - Intro'

Learn online: app.mobius.academy/math/units/time_telling_intro/

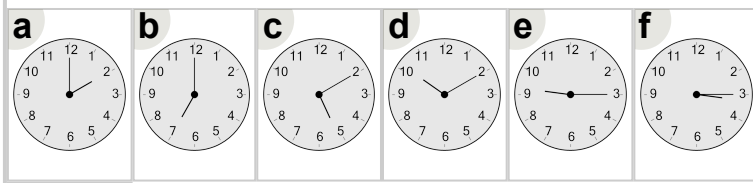
1 Which clock shows the time indicated

eleven o'clock



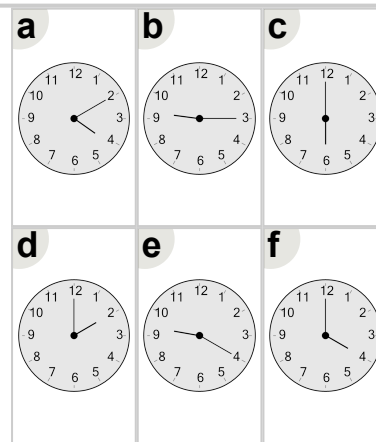
2 Which clock shows the time indicated

seven o'clock



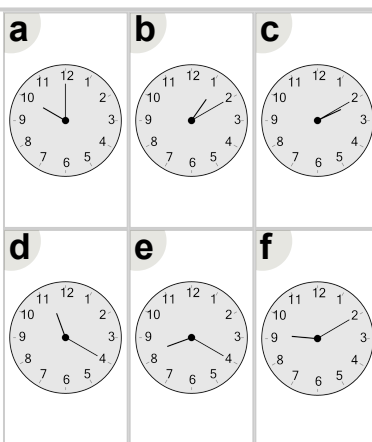
3 Which clock shows the time indicated

six o'clock



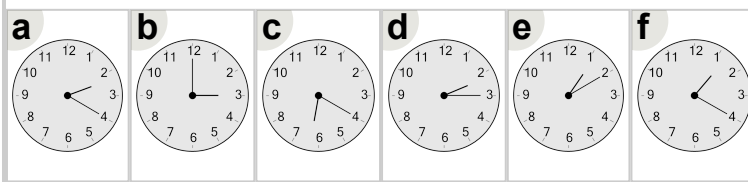
4 Which clock shows the time indicated

ten o'clock



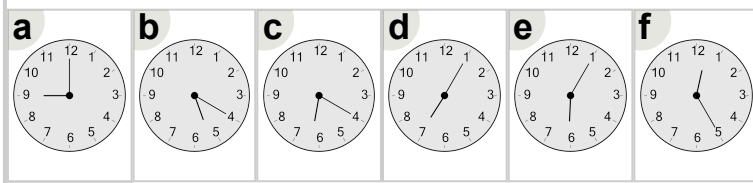
5 Which clock shows the time indicated

three o'clock



6 Which clock shows the time indicated

nine o'clock



7 Which clock shows the time indicated

two o'clock

