

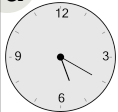
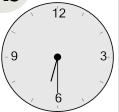






Math worksheet on 'Time - Telling - Words to Clock - Quarter Hours (Level 1)'. Part of a broader unit on 'Time - Telling - Intro'

Learn online: app.mobius.academy/math/units/time_telling_intro/

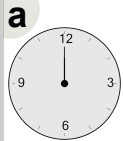
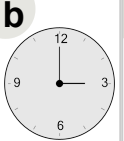
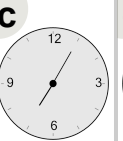

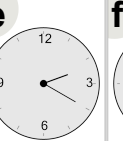
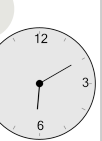
1 Which clock shows the time indicated

half past two

a  **b**  **c**  **d**  **e**  **f** 

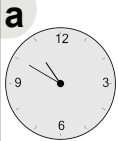
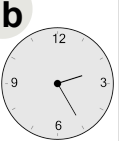




2 Which clock shows the time indicated

three o'clock

a  **b**  **c**  **d**  **e**  **f** 


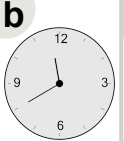


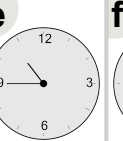

3 Which clock shows the time indicated

half past six

a  **b**  **c**  **d**  **e**  **f** 

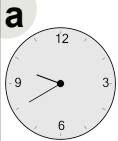
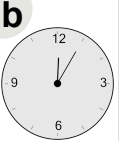




4 Which clock shows the time indicated

quarter to eleven

a  **b**  **c**  **d**  **e**  **f** 


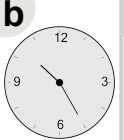

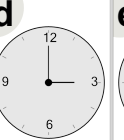
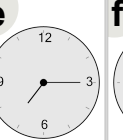
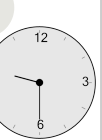
5 Which clock shows the time indicated

half past nine

a  **b**  **c**  **d**  **e**  **f** 

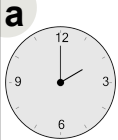
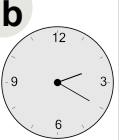



6 Which clock shows the time indicated

quarter past seven

a  **b**  **c**  **d**  **e**  **f** 

7 Which clock shows the time indicated

quarter past one

a  **b**  **c**  **d**  **e**  **f** 