



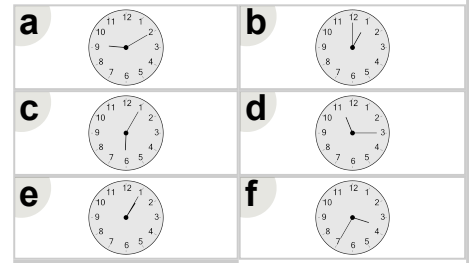
Math worksheet on 'Time - Telling - Words to Clock - Quarter Hours (Level 2)'. Part of a broader unit on 'Time - Telling - Intro'

Learn online: app.mobius.academy/math/units/time_telling_intro/

1

Which clock shows the time indicated

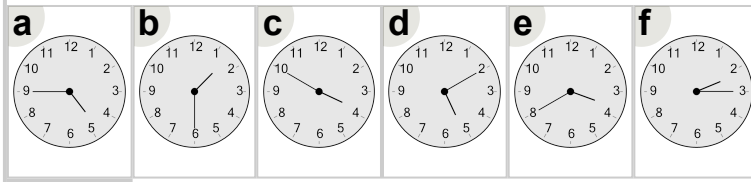
quarter past eleven



2

Which clock shows the time indicated

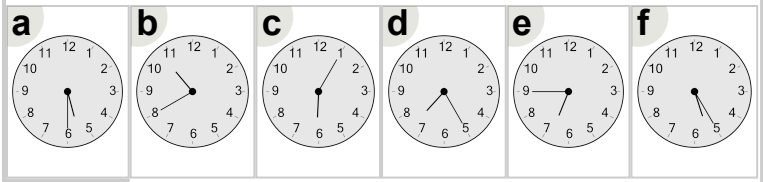
half past one



3

Which clock shows the time indicated

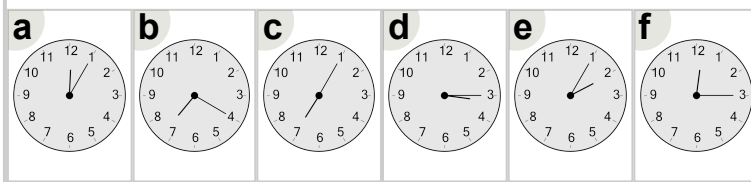
quarter to seven



4

Which clock shows the time indicated

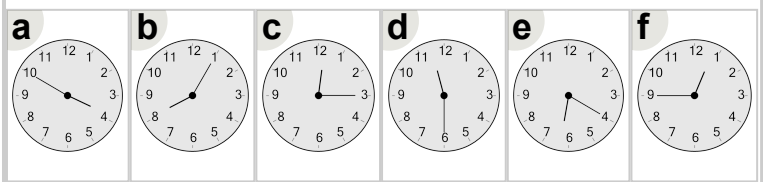
quarter past three



5

Which clock shows the time indicated

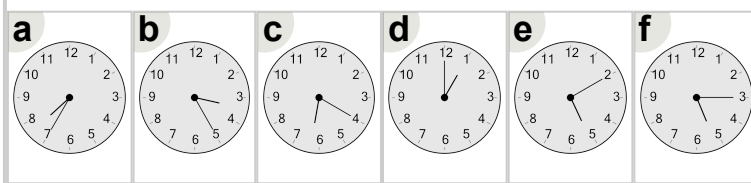
half past eleven



6

Which clock shows the time indicated

quarter past five



7

Which clock shows the time indicated

quarter past one

