

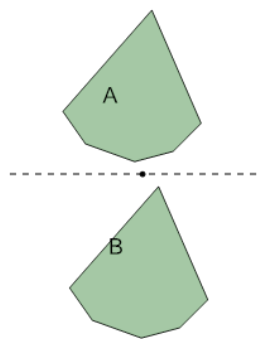


Math worksheet on 'Transformations - Identify Reflections (Level 1)'. Part of a broader unit on 'Geometry - Angles and Transformations - Practice'

Learn online:

app.mobius.academy/math/units/geometry_angles_and_transformations_practice/

1



Is the transformation of shape A into shape B a Reflection?

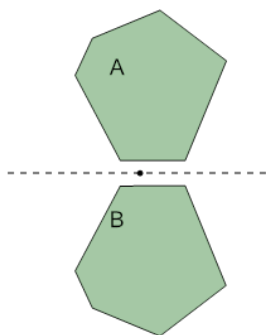
a

Reflection

b

Not a Reflection

2



Is the transformation of shape A into shape B a Reflection?

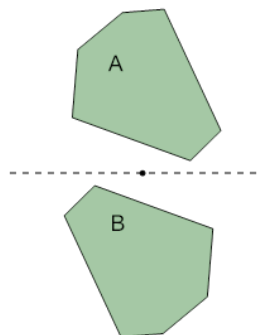
a

Not a Reflection

b

Reflection

3



Is the transformation of shape A into shape B a Reflection?

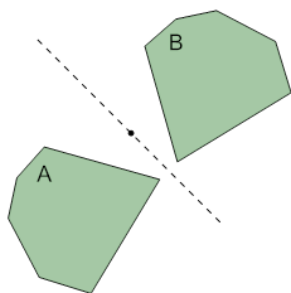
a

Not a Reflection

b

Reflection

4



Is the transformation of shape A into shape B a Reflection?

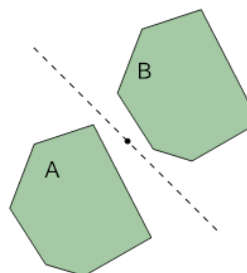
a

Reflection

b

Not a Reflection

5



Is the transformation of shape A into shape B a Reflection?

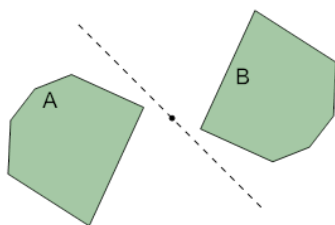
a

Reflection

b

Not a Reflection

6



Is the transformation of shape A into shape B a Reflection?

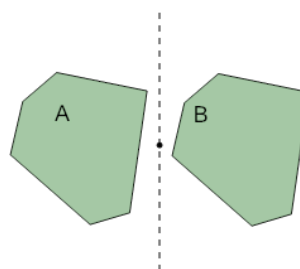
a

Reflection

b

Not a Reflection

7



Is the transformation of shape A into shape B a Reflection?

a

Not a Reflection

b

Reflection