

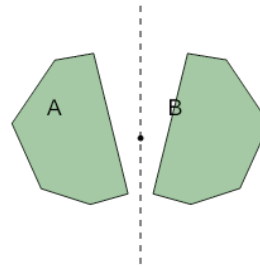


Math worksheet on 'Transformations - Identify Rotations (Level 1)'. Part of a broader unit on 'Geometry - Angles and Transformations - Intro'

Learn online:

app.mobius.academy/math/units/geometry_angles_and_transformations/

1



Is the transformation of shape A into shape B a Rotation?

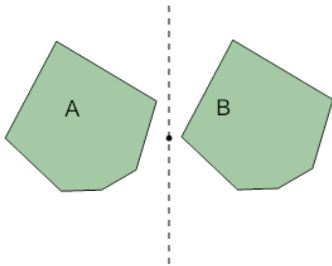
a

Not a Rotation

b

Rotation

2



Is the transformation of shape A into shape B a Rotation?

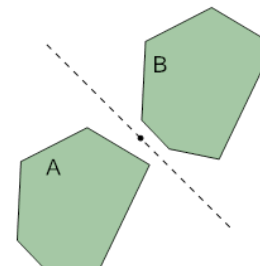
a

Rotation

b

Not a Rotation

3



Is the transformation of shape A into shape B a Rotation?

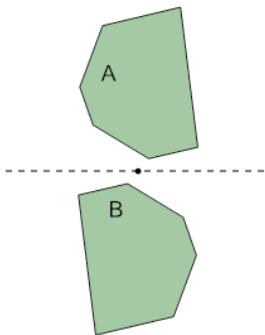
a

Rotation

b

Not a Rotation

4



Is the transformation of shape A into shape B a Rotation?

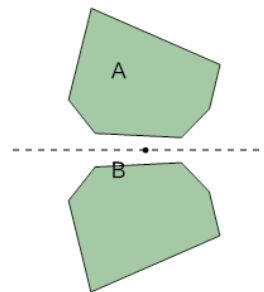
a

Not a Rotation

b

Rotation

5



Is the transformation of shape A into shape B a Rotation?

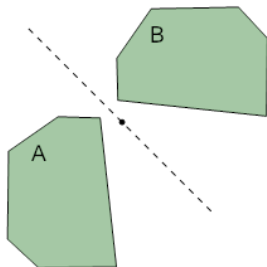
a

Not a Rotation

b

Rotation

6



Is the transformation of shape A into shape B a Rotation?

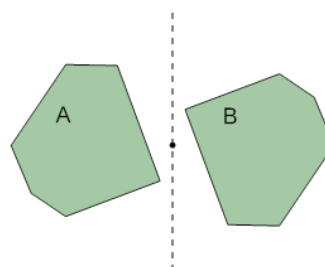
a

Rotation

b

Not a Rotation

7



Is the transformation of shape A into shape B a Rotation?

a

Not a Rotation

b

Rotation