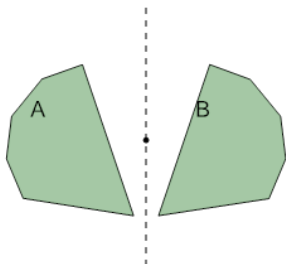




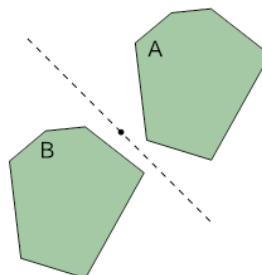
Transformations - Identify Translations

**1**

Is the transformation of shape A into shape B a Translation?

A
Not a Translation

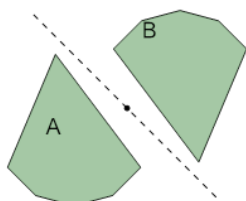
B
Translation

2

Is the transformation of shape A into shape B a Translation?

A
Not a Translation

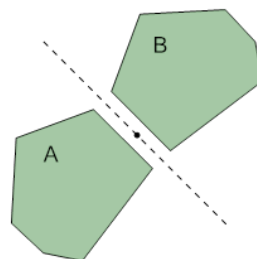
B
Translation

3

Is the transformation of shape A into shape B a Translation?

A
Translation

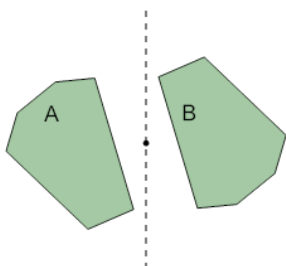
B
Not a Translation

4

Is the transformation of shape A into shape B a Translation?

A
Not a Translation

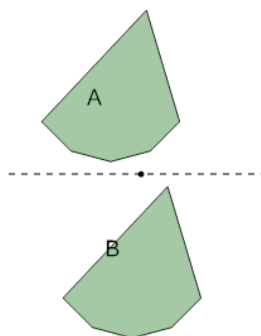
B
Translation

5

Is the transformation of shape A into shape B a Translation?

A
Translation

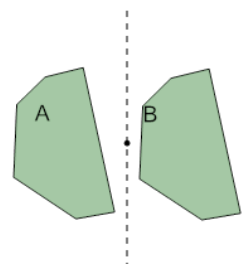
B
Not a Translation

6

Is the transformation of shape A into shape B a Translation?

A
Translation

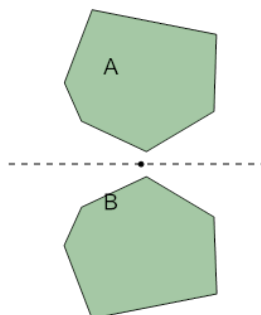
B
Not a Translation

7

Is the transformation of shape A into shape B a Translation?

A
Translation

B
Not a Translation

8

Is the transformation of shape A into shape B a Translation?

A
Translation

B
Not a Translation