

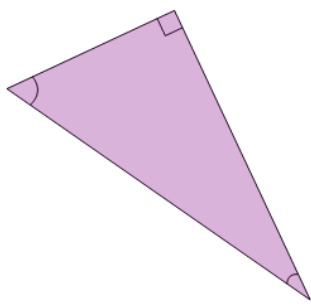


Math worksheet on 'Triangle Classification - Angles - First Time (Level 1)'. Part of a broader unit on 'Geometry - Triangle Classification - Practice'

Learn online:

app.mobius.academy/math/units/geometry_shapes_triangles_classifying_practice/

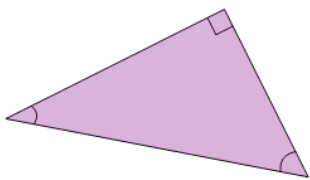
1



In geometry, what's the name for a triangle where one of the angles is equal to 90° ?

a	b
Right	Rheumatoid

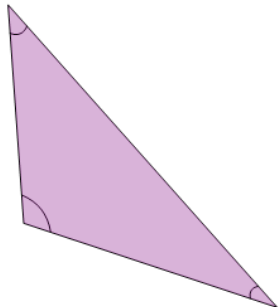
2



In geometry, what's the name for a triangle where one of the angles is equal to 90° ?

a	b
Right	Resting

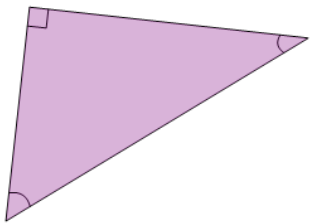
3



In geometry, what's the name for a triangle where one of the angles is more than 90° ?

a	b
Orangutan	Obtuse

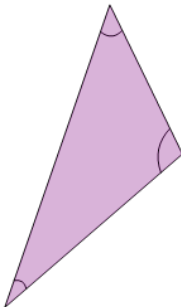
4



In geometry, what's the name for a triangle where one of the angles is equal to 90° ?

a	b
Resting	Right

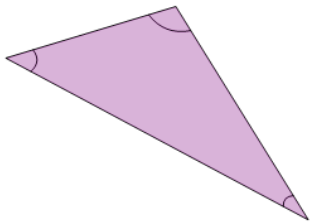
5



In geometry, what's the name for a triangle where one of the angles is more than 90° ?

a	b
Obtuse	Orange

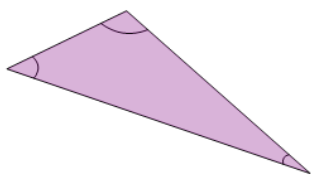
6



In geometry, what's the name for a triangle where one of the angles is more than 90° ?

a	b
Obtuse	Orangutan

7



In geometry, what's the name for a triangle where one of the angles is more than 90° ?

a	b
Octopus	Obtuse