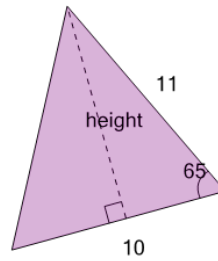




Math worksheet on 'Trigonometry - Area from Sine - Full Calculation (Level 1)'. Part of a broader unit on 'Trigonometry - Solving Triangles'

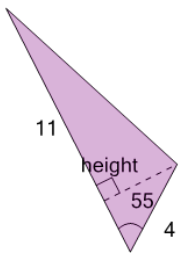
Learn online: app.mobius.academy/math/units/trigonometry_solving_triangles/

1 Solve for the area of the triangle



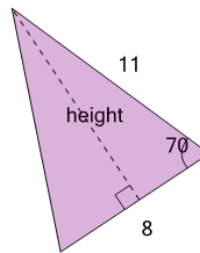
a	b	c
47.4	39.9	52.3
d	e	f
59.8	54.8	49.8

2 Solve for the area of the triangle



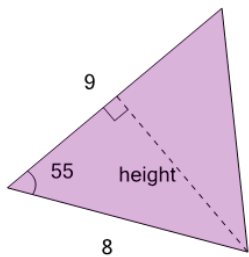
a	b	c
18	17.1	20.7
d	e	f
13.5	21.6	15.3

3 Solve for the area of the triangle



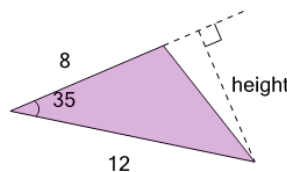
a	b	c
43.4	49.6	45.5
d	e	f
33.1	31	41.3

4 Solve for the area of the triangle



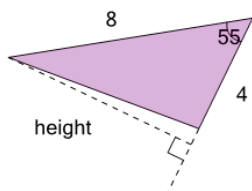
a	b	c
31	23.6	29.5
d	e	f
33.9	26.5	28

5 Solve for the area of the triangle



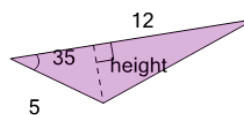
a	b	c
24.8	33	28.9
d	e	f
22	27.5	20.6

6 Solve for the area of the triangle



a	b	c
15.1	11.8	13.1
d	e	f
10.5	14.4	12.5

7 Solve for the area of the triangle



a	b	c
20.6	19.8	16.3
d	e	f
13.8	12.9	17.2