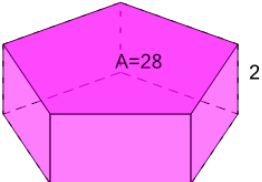




Volume of a Pentagonal Prism - Calculate from Base Area

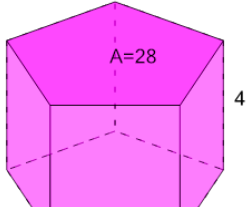


1 What is the volume of this Pentagonal Prism?



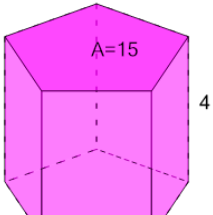
A	B	C
26	86	51
D	E	F
66	56	16

2 What is the volume of this Pentagonal Prism?



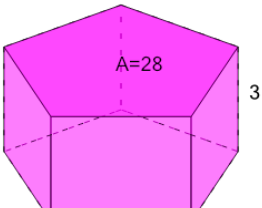
A	B	C
101	35	57
D	E	F
79	123	112

3 What is the volume of this Pentagonal Prism?



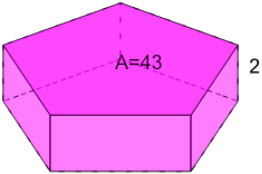
A	B	C
108	54	90
D	E	F
60	78	18

4 What is the volume of this Pentagonal Prism?



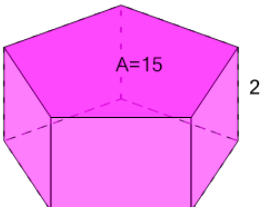
A	B	C
132	140	116
D	E	F
84	76	108

5 What is the volume of this Pentagonal Prism?



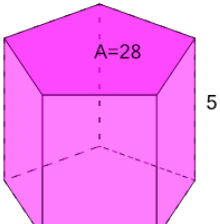
A	B	C
86	14	78
D	E	F
62	110	38

6 What is the volume of this Pentagonal Prism?



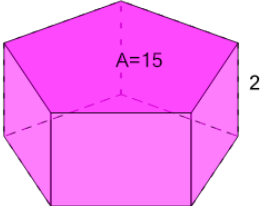
A	B	C
15	30	27
D	E	F
42	57	36

7 What is the volume of this Pentagonal Prism?



A	B	C
70	140	182
D	E	F
42	168	84

8 What is the volume of this Pentagonal Prism?



A	B	C
42	30	36
D	E	F
9	33	27