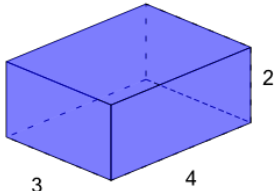




Math worksheet on 'Volume of a Rectangular Prism - Calculate (Level 1)'. Part of a broader unit on 'Geometry - Volume Logic with 3D Shapes - Intro'

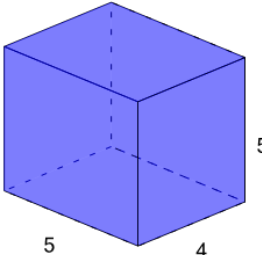
Learn online: app.mobius.academy/math/units/geometry_volume_logic_intro/

1 What is the volume of this Rectangular Prism?



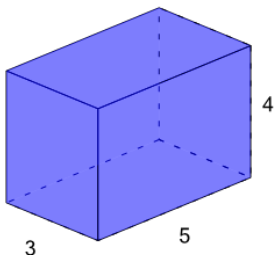
a	b	c
18	10	42
d	e	f
8	24	14

2 What is the volume of this Rectangular Prism?



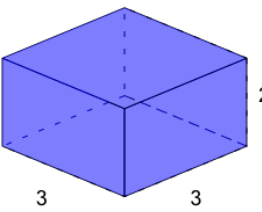
a	b	c
40	100	170
d	e	f
130	120	70

3 What is the volume of this Rectangular Prism?



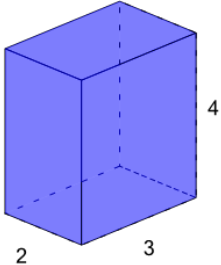
a	b	c
54	78	48
d	e	f
114	60	42

4 What is the volume of this Rectangular Prism?



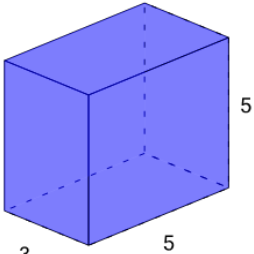
a	b	c
22	20	18
d	e	f
16	23	11

5 What is the volume of this Rectangular Prism?



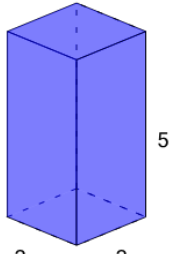
a	b	c
18	6	8
d	e	f
24	4	42

6 What is the volume of this Rectangular Prism?



a	b	c
19	110	96
d	e	f
103	68	75

7 What is the volume of this Rectangular Prism?



a	b	c
34	18	38
d	e	f
20	28	8