

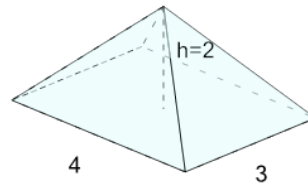


Math worksheet on 'Volume - Rectangular Prism - Image to Decimal (Level 1)'. Part of a broader unit on 'Geometry - Volume and Surface Area of Complex 3D Shapes - Advanced'

Learn online:

app.mobius.academy/math/units/geometry_complex_3d_shapes_advanced/

1



What is the volume of this Rectangular Pyramid?

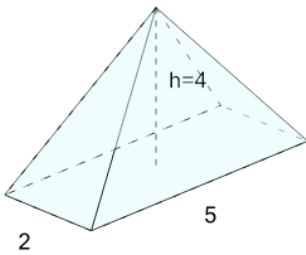
a

11

b

8

2



What is the volume of this Rectangular Pyramid?

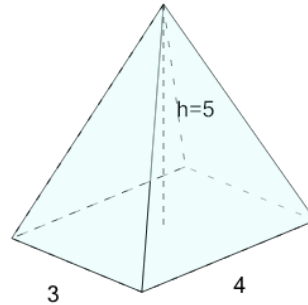
a

13.33

b

15.33

3



What is the volume of this Rectangular Pyramid?

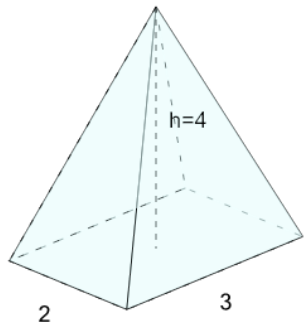
a

21

b

20

4



What is the volume of this Rectangular Pyramid?

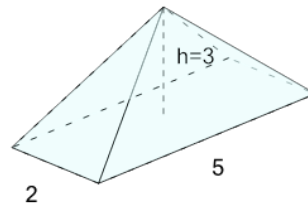
a

11

b

8

5



What is the volume of this Rectangular Pyramid?

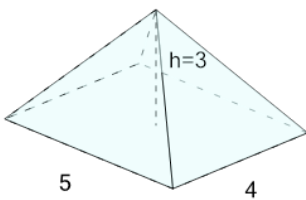
a

10

b

12

6



What is the volume of this Rectangular Pyramid?

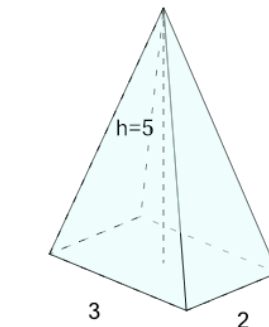
a

20

b

21

7



What is the volume of this Rectangular Pyramid?

a

7

b

10